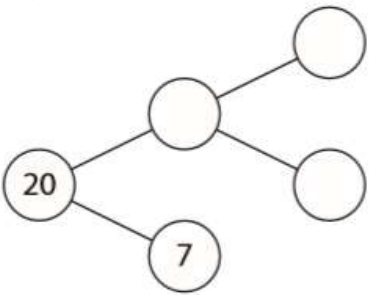


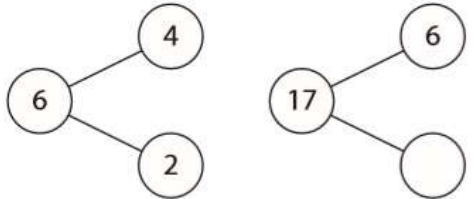
Monday Mastery

Mastery Task

Complete:

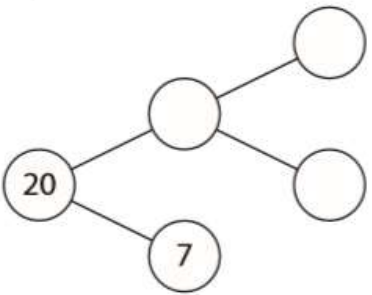


Complete:

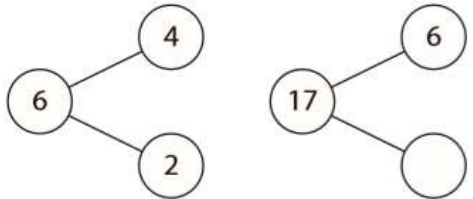


Mastery Task

Complete:

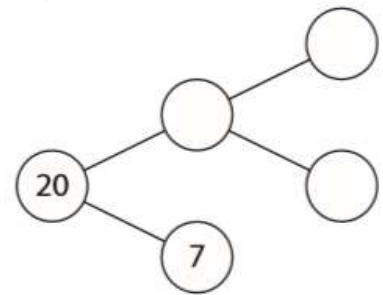


Complete:

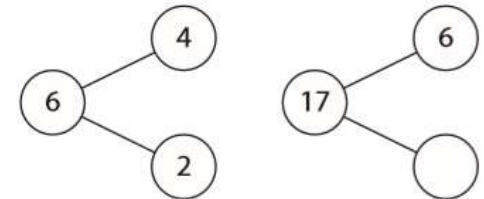


Mastery Task

Complete:



Complete:



Tuesday Mastery

Mastery Task

Fill in the missing numbers:

$$3 + 5 + \square = 10$$

$$1 + 5 + \square = 10$$

Mastery Task

Fill in the missing numbers:

$$3 + 5 + \square = 10$$

$$1 + 5 + \square = 10$$

Mastery Task

Fill in the missing numbers:

$$3 + 5 + \square = 10$$

$$1 + 5 + \square = 10$$

Mastery Task

Fill in the missing numbers:

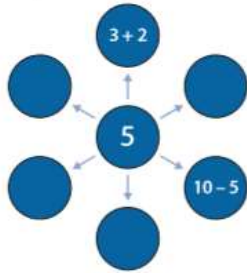
$$3 + 5 + \square = 10$$

$$1 + 5 + \square = 10$$

Wednesday mastery

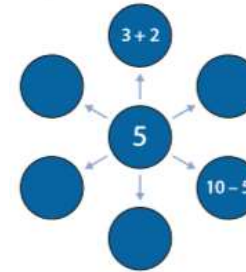
Mastery Task

If you know one fact, what other facts do you know?  
Complete:



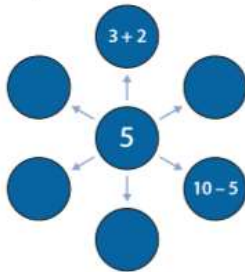
Mastery Task

If you know one fact, what other facts do you know?  
Complete:



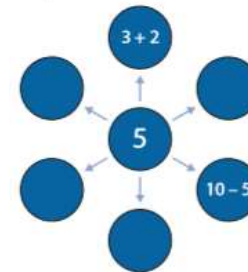
Mastery Task

If you know one fact, what other facts do you know?  
Complete:



Mastery Task

If you know one fact, what other facts do you know?  
Complete:



### Mastery Task

4. There are 7 bears in the boat. If two get out, how many are left?  
Write a matching number sentence.
5. If 3 more get in, how many bears are in the boat?  
  
Write a matching number sentence.
6. If 2 get out, how many are left in the boat?  
  
Write a matching number sentence.

### Mastery Task

1. There are 7 bears in the boat. If two get out, how many are left?  
Write a matching number sentence.
2. If 3 more get in, how many bears are in the boat?  
  
Write a matching number sentence.
3. If 2 get out, how many are left in the boat?  
  
Write a matching number sentence.

### Mastery Task

10. There are 7 bears in the boat. If two get out, how many are left?  
Write a matching number sentence.
11. If 3 more get in, how many bears are in the boat?  
  
Write a matching number sentence.
12. If 2 get out, how many are left in the boat?  
  
Write a matching number sentence.

### Mastery Task

7. There are 7 bears in the boat. If two get out, how many are left?  
Write a matching number sentence.
8. If 3 more get in, how many bears are in the boat?  
  
Write a matching number sentence.
9. If 2 get out, how many are left in the boat?  
  
Write a matching number sentence.

Mastery Task

---

Robert has 5 more cherries than John.

John has 11 cherries.

How many does Robert have?

Write a number sentence you would use to solve the problem.

$$\square \quad \square \quad \square = \square$$

Mastery Task

---

Robert has 5 more cherries than John.

John has 11 cherries.

How many does Robert have?

Write a number sentence you would use to solve the problem.

$$\square \quad \square \quad \square = \square$$

Mastery Task

---

Robert has 5 more cherries than John.

John has 11 cherries.

How many does Robert have?

Write a number sentence you would use to solve the problem.

$$\square \quad \square \quad \square = \square$$

Mastery Task

---

Robert has 5 more cherries than John.

John has 11 cherries.

How many does Robert have?

Write a number sentence you would use to solve the problem.

$$\square \quad \square \quad \square = \square$$